

International S.S.G.K Maestro Olympiad (ISGMO)





CLASS-1 SAMPLE QUESTION PAPER

The Actual Question Paper Contains 30 Questions. The duration of the Test Paper is 60 Minutes.



CPS OLYMPIADS
COMPETITION PROMOTION SOCIETY

DECADES OF EDUCATIONAL EXCELLENCE
An ISO 9001:2008 Certificated Organization

- Which one of following dresses is not worn in the upper part of the body?
(A) Jacket (B) Shirt
(C) Tie (D) Dhoti
(E) None of these
- Identify the Indian singing personality given in the picture.
(A) Mahendra Kapoor
(B) Mohammad Rafi
(C) Mukesh
(D) Kishor Kumar
(E) None of these
- Which one of following statements is false about the Mother's Day of India?
(A) This is the day to remember and honour mothers
(B) This is celebrated in May
(C) This is celebrated on Monday
(D) This is celebrated on the 2nd Sunday of May
(E) None of these
- If Kamla is the wife of Ramesh and Ramesh is the father of Suresh, then which one of the following statement is not true?
(A) Ramesh is the husband of Kamla
(B) Suresh is the son of Ramesh
(C) Suresh is the son of Kamla
(D) Suresh is the daughter of Ramesh
(E) None of these
- Sachin Tendulkar is a great Indian cricketer. What is his full name?
(A) Sachin Naresh Tendulkar
(B) Sachin Paresh Tendulkar
(C) Sachin Parwesh Tendulkar
(D) Sachin Ramesh Tendulkar
(E) None of these
- Pick up the incorrect statement about the person given in the picture.
(A) His name is Bhagat Singh
(B) He is called Shaheed Bhagat Singh
(C) He was a famous actor
(D) He was a hero of Indian freedom movement
(E) None of these
- Pictures of four animals are given below. Find the one which is a flesh eater.
(A)  Horse (B)  Cow
(C)  Goat (D)  Lion
(E) None of these
- Which one of the following is rightly matched?
(A) Chacha Nehru –Jawaharlal Nehru
(B) Panther-Domestic animal
(C) Orange- vegetable
(D) Potato- Means of transport
(E) None of these
- Which one of the following option is not a dress for women?
(A) Lehanga (B) Gaghra
(C) Dhoti and Kurta (D) Saree
(E) None of these
- Which one of the following fruits is the biggest in shape and size?
(A) Mango (B) Orange
(C) Water melon (D) Apple
(E) None of these