

International I.T. Whiz-Kid Olympiad (IIWO)

CLASS-6 SAMPLE QUESTION PAPER

The Actual Question Paper Contains 50 Questions. The duration of the Test Paper is 60 Minutes.







CPS OLYMPIADS
COMPETITION PROMOTION SOCIETY

DECADES OF EDUCATIONAL EXCELLENCE
An ISO 9001:2008 Certificated Organization

1. Which of the following is NOT a type of an optical disk?

- (A) Blu-Ray (B) DVD
(C) CD-ROM (D) Zip disk
(E) None of these

2. Using flowchart you can grip logic of algorithm easily. Which one of the following symbol is used to represent conditional situation of a process in flowchart?

- (A) 
(B) 
(C) 
(D) 

3. Which of the following is non-removable media?

- (A) Optical Disk Drives
(B) RAID array controller
(C) USB Flash drive
(D) Zip drive
(E) None of these

4. The given image is used for?

- (A) Slide Master View
(B) Custom View
(C) Note Master
(D) Slide Sorter View
(E) None of these



5. Which of the following will you NOT be using while attaching a peripheral device to a computer?

- (A) Serial Port (B) USB
(C) BIOS (D) Parallel Port
(E) None of these

6. The image shows an IDE cable. IDE cables are used to transfer data to and from the motherboard. What devices are these cables connected to?

- (A) Keyboard (B) Scanner
(C) Hard Disk and Optical Drives
(D) Printers (E) None of these

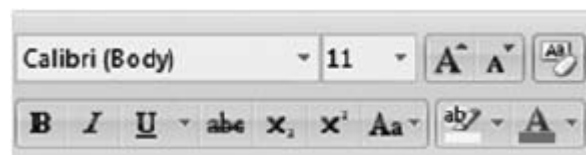
7. Napier's bone was capable of doing division. It was a manual device. Which developed this wonderful machine of that period?

- (A) Joseph Napier (B) John Napier
(C) Jennifer Napier (D) Albert Napier
(E) None of these

8. Who was the inventor of Mark-I which was probably his last electromechanical computer?

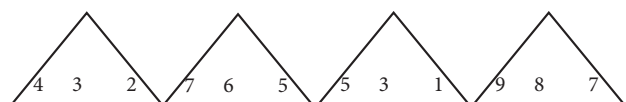
- (A) Howard Aiken (B) Herman Hollerith
(C) Charles Babbage (D) Joseph Jacquard
(E) None of these

9. Under Which group on the ribbon do you find the given image ?



- (A) Font (B) Paragraph
(C) Style (D) Clipboard
(E) None of these

10. Which group of numbers does not fit in the given series?



- I II III IV
(A) III (B) II
(C) IV (D) I
(E) None of these