

International Maths Wizard Olympiad (IMWO)

CLASS-2 SAMPLE QUESTION PAPER

The Actual Question Paper Contains 30 Questions. The duration of the Test Paper is 60 Minutes.



CPS OLYMPIADS
COMPETITION PROMOTION SOCIETY

DECADES OF EDUCATIONAL EXCELLENCE
An ISO 9001:2008 Certificated Organization

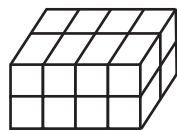
1. When written in words, 809 is same is -----.
- (A) Eighty and nine
(B) Eight hundred and nine
(C) Eight hundred ninety
(D) Eight zero and nine
(E) None of these

2. If $\square \div 5 = 5 \times 5$, then \square is equal to
- (A) 25 (B) 60
(C) 75 (D) 175
(E) None of these

3. My watch shows 7:30 am. It is 20 minutes slow. The correct time is -----.
- (A) 7:50 am (B) 7:20 am
(C) 7:35 am (D) 7:10 am
(E) None of these

4. Manisha was born on 29th February. Her birthday comes
- (A) Every year
(B) Twice in a year
(C) After every four years
(D) After every two years
(E) None of these

5. How many bricks are there in the given figure?
- (A) 4
(B) 8
(C) 16
(D) 20
(E) None of these



6. _____
- (A) (B)
(C) (D)
(E) None of these

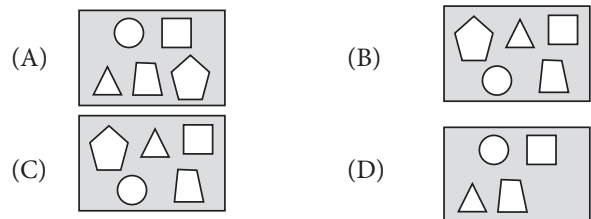
7. Each stands for 5 candles, then stands for ----- candles.
- (A) 5 (B) 10
(C) 15 (D) 20
(E) None of these

8. Which doll is 4th to the left of 3rd doll from right side ?



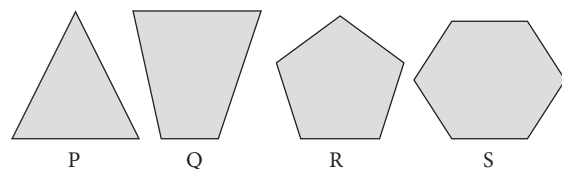
- (A) P (B) U
(C) R (D) Q
(E) None of these

9. Select the odd one out.



- (E) None of these

10. Which figure does not belong to the other three in the group of four figures?



- (A) P (B) Q
(C) R (D) S
(E) None of these