

# International IQ Genius Olympiad (IIQGO)

## CLASS-3 SAMPLE QUESTION PAPER

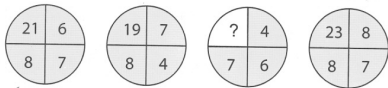
The Actual Question Paper Contains 40 Questions. The duration of the Test Paper is 60 Minutes.



**CPS OLYMPIADS**  
COMPETITION PROMOTION SOCIETY

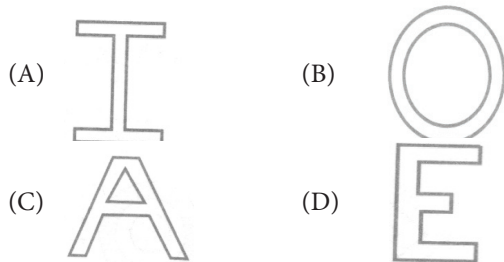
*DECADES OF EDUCATIONAL EXCELLENCE*  
An ISO 9001:2008 Certified Organization

1. By which number can you replace the question mark in the pattern?



- (A) 17 (B) 18  
(C) 19 (D) 21  
(E) None of these

2. Find the odd one out.



- (E) None of these

3. Find the meaningful combination of numbers so that letters are arranged accordingly to form a meaningful word.

M U E R N B  
1 2 3 4 5 6

- (A) 5, 1, 2, 6, 3, 4 (B) 5, 2, 1, 6, 3, 4  
(C) 2, 5, 1, 6, 3, 4 (D) 2, 1, 5, 6, 3, 4  
(E) None of these

4. In which of the following series, the number of the letters skipped between adjacent letters is same?

- (A) A C D F (B) G I K N  
(C) S U W Y (D) B E G I  
(E) None of these

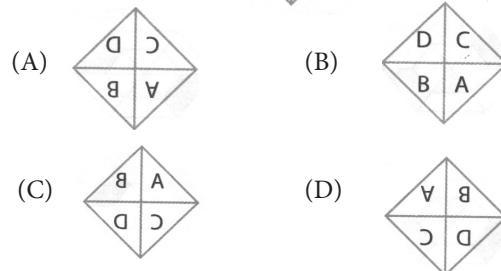
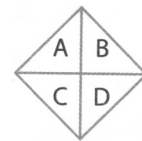
5. In a row of 10 boys, Rohan is fourth from the left end. What is his position from the right end?

- (A) Fourth (B) Fifth  
(C) Sixth  
(D) Seventh  
(E) None of these

6. If 'air' is called 'water'; 'water' is called 'stone' and 'stone' is called 'tree', then which is polluted through air pollution?

- (A) Air (B) Water  
(C) Stone (D) Tree  
(E) None of these

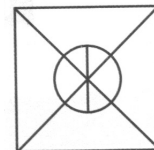
7. Find the mirror image of the figure given below when mirror is placed vertically to the left.



- (E) None of these

8. Which of the following alphabets is NOT embedded in the given figure?


- (A) K (B) I  
(C) F (D) O  
(E) None of these



9. Today is Thursday. Second day from today is Friday. 16<sup>TH</sup> day from today is \_\_\_\_\_.

- (A) Monday (B) Wednesday  
(C) Friday (D) Sunday  
(E) None of these

10. How many triangles can be formed using below toothpicks, if each toothpick is used only once?



- (A) 8 (B) 12  
(C) 6 (D) 4  
(E) None of these