

International I.T. Whiz-Kid Olympiad (IIWO)

















CLASS-4 SAMPLE QUESTION PAPER

The Actual Question Paper Contains 40 Questions. The duration of the Test Paper is 60 Minutes.



CPS OLYMPIADS
COMPETITION PROMOTION SOCIETY

DECADES OF EDUCATIONAL EXCELLENCE
An ISO 9001:2008 Certificated Organization

- Napier Bones is so named because it was invented by _____.**
(A) John Napier (B) Blaise Pascal
(C) Thomas Napier (D) Thomas Abacus
(E) None of these
- Which of the following determines the power of a computer ?**
(A) Speed of its processor and capacity of RAM
(B) Capacity of Hard Disk
(C) Speed of its process and operation system
(D) Speed of its processor and capacity of RAM
(E) None of these
- Which of the following is NOT a software ?**
(A)  Norton by Symantec
(B)  Windows - 7
(C) 
(D)  CorelDRAW
(E) None of these
- How is a generation of computers classified ?**
(A) By the devices used in memory and processor
(B) The accuracy of the computer
(C) The model of the computer
(D) By the speed of the computer
(E) None of these
- What is the shortcut to close a program ?**
(A)  +  (B)  + 
(C)  +  (D)  + 
(E) None of these
- The most suitable output device for an architect to print large plans would be a/an _____.**
(A) Inkjet printer (B) Laser printer
(C) Dot matrix printer (D) Plotter
(E) None of these
- Which input device can be used to read data from packaging and book covers ?**
(A) Barcode Reader
(B) Optical Mark Reader
(C) Scanner
(D) Keyboard
(E) None of these
- The various parts of the computer are connected to each other with _____.**
(A) Wirelessly (B) Power Cables
(C) Data Cables (D) All of these
(E) None of these
- The best input device for inputting large amounts of multiple choice test papers would be _____.**
(A) Scanner
(B) Optical Mark Reader
(C) Barcode (D) Keyboard
(E) None of these
- You can enter text in your drawing using _____ found in the _____ of the ribbon.**
(A)  Home tab (B)  Home tab
(C)  View tab (D)  View tab
(E) None of these